

Exam Advanced Logic

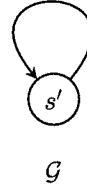
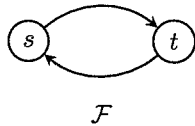
Vrije Universiteit Amsterdam, 4 June 2012, 18:30–21:15

This exam consists of four questions. Use of textbook, definition sheets, etc. is not allowed.

1. (a) Prove or disprove the validity of $\Box\Diamond\Box p \rightarrow \Diamond p$ in reflexive frames.
(b) Prove or disprove the validity of $p \rightarrow \Diamond\Box p$ in reflexive, transitive frames.
(c) Is the formula $\Box p \rightarrow \Box\Box\Box p$ valid in transitive frames? Is it valid only in transitive frames? Prove your answers.
(d) Show that the frame property $\forall xy (Rxy \rightarrow x = y)$ is characterized by the modal formula $p \rightarrow \Box p$.
2. Consider the extension of the basic modal language with the ‘difference’ operator D whose semantics is given by:

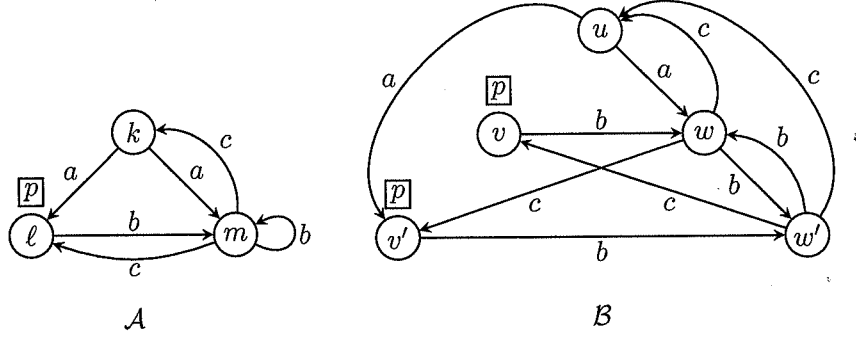
$\mathcal{M}, s \models D\varphi$ if and only if there exists $t \neq s$ such that $\mathcal{M}, t \models \varphi$.

Let \mathcal{F} en \mathcal{G} be the frames defined by the following pictures:



- (a) Is the formula $\Diamond p \rightarrow Dp$ valid in \mathcal{F} ? Explain your answer.
- (b) Is the formula $\Diamond p \rightarrow Dp$ valid in \mathcal{G} ? Explain your answer.
- (c) Show that the formula $\Diamond p \rightarrow Dp$ characterizes the class of irreflexive frames.
- (d) Show that D is not definable in the basic modal language.

3. Consider the $\{a, b, c\}$ -models \mathcal{A} and \mathcal{B} defined by:



- (a) Define a relation $E \subseteq \{k, \ell, m\} \times \{u, v, w, v', w'\}$ such that $E : \mathcal{A}, k \Leftrightarrow \mathcal{B}, u$. Show that E satisfies the forward condition (*zig*) of bisimulations.
- (b) Is there a formula which is true in state m but false in state w ? Explain.
- (c) Let $\hat{\mathcal{A}}$ be the PDL-extension of model \mathcal{A} . Compute the transition relation \hat{R}_α corresponding to the PDL-program α :

$$\alpha = \text{if } p \text{ then } (bc)^* \text{ else } (a \cup c)^*$$

- (d) Determine for each of the PDL-formulae $\langle \alpha \rangle p$ and $[\alpha]p$ whether it holds in $\hat{\mathcal{A}}$.

4. The Hilbert system T is the extension of the system K with the axiom of veridicality A1 (if something is known, it is true). System $S4$ is the extension of T with A2, the axiom of positive introspection. System $S5$ is the extension of $S4$ with A3, the axiom of negative introspection.

(a) Formulate the completeness theorem for the systems T and $S5$.

(b) Give a derivation or construct a countermodel:

- (i) $\vdash_T (K(p \rightarrow q) \wedge p) \rightarrow q$
- (ii) $\vdash_{S4} \neg K K p \rightarrow K \neg K p$
- (iii) $\vdash_{S5} \neg K K p \rightarrow K \neg K p$